
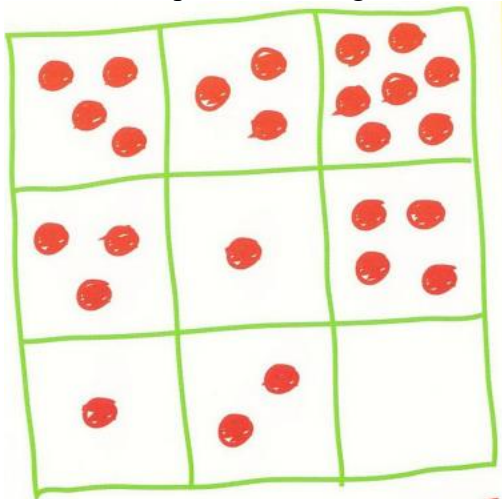


Question 1:  
Which is the odd one out?









Question 2:  
Discover the pattern in the grid, and draw the correct number of dots in the blank square.



Question 3:

Each number is connected to the shape above it. Find out how, then write the missing number under the hexagon.

 28	 16
 12	 20
 .....	 32

Question 4:

There are three houses on this street. Two people live in each house. As you look at the houses...

- ...Mike lives directly to the right of Ray.
- ....Andy lives directly to the left of Mia.
- ...Mia lives directly to the left of Anna.
- ...Rose lives directly to the left of Mia.

Who lives where? Write each person's name under their house.

